


David is sharing his treats with his friends. Help him find how many treats each child can get.


I share 8 chocolate bars with 3 friends.




① Each child gets \_\_\_\_\_  .


I share 12 bags of popcorn with 2 friends.



② Each child gets \_\_\_\_\_  .

I share 6 boxes of candies with Jessica.



③ Each child gets \_\_\_\_\_  .