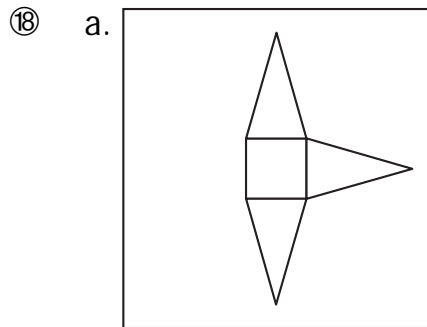


Draw the missing face of each net. Then solve the problems.

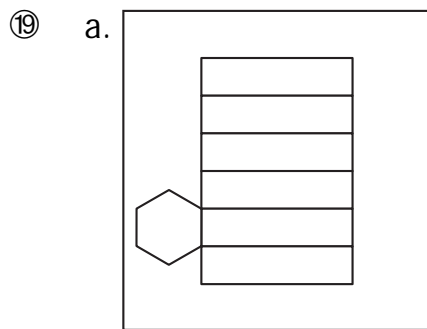


b. What is the solid that can be made from this net?

Answer : _____

c. How many triangular faces does this solid have?

Answer : _____

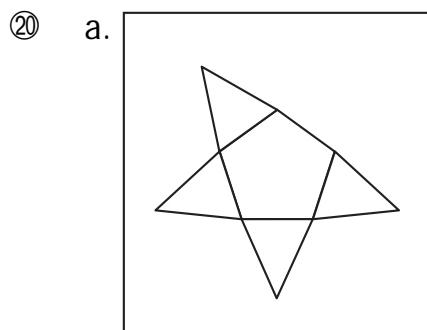


b. What is the solid that can be made from this net?

Answer : _____

c. How many rectangular faces does this solid have?

Answer : _____

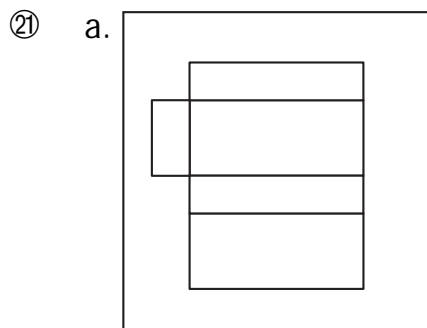


b. What is the solid that can be made from this net?

Answer : _____

c. How many triangular faces does this solid have?

Answer : _____

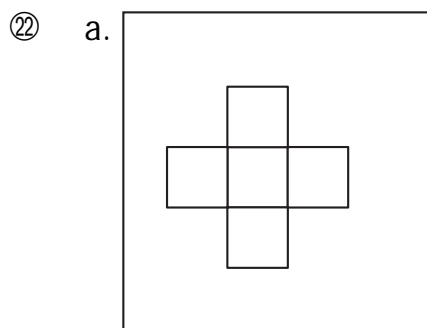


b. What is the solid that can be made from this net?

Answer : _____

c. How many rectangular faces does this solid have?

Answer : _____



b. What is the solid that can be made from this net?

Answer : _____

c. Draw this solid on the dot paper.

