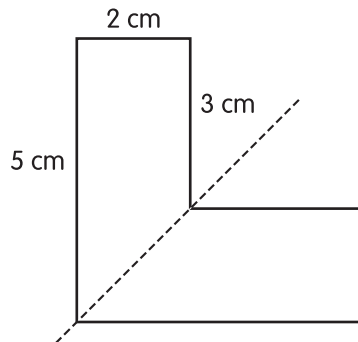


- 1** The dotted line is the line of symmetry of the L-shape.



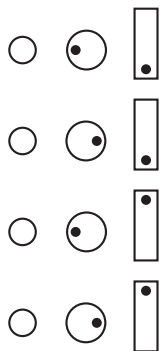
What is the perimeter of the L-shape?

- 10 cm
- 16 cm
- 20 cm
- 24 cm


- 2** Look at the pattern.



Following the pattern, what are the next two shapes?



- 3** The clock shows the time that Judy starts practising the piano.



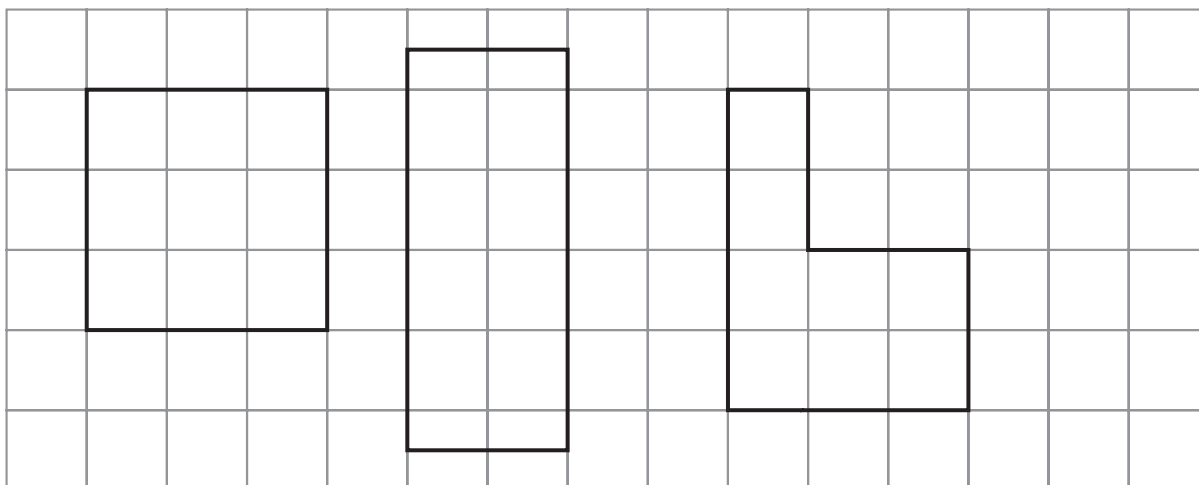
If Judy practises the piano for 35 minutes, at what time will she finish?

- 4:10
- 5:05
- 5:20
- 5:45

- 4** Jill pays a toonie for a hot dog which costs \$1.75. What is her change?

- a penny
- a nickel
- a dime
- a quarter

- 10 Look at the shapes that Jason drew.



Jason says, "The square has the least perimeter, so it has the least area." Is he correct? If not, what is the correct answer?

Explain Your Thinking

A large empty rectangular box for writing the explanation.